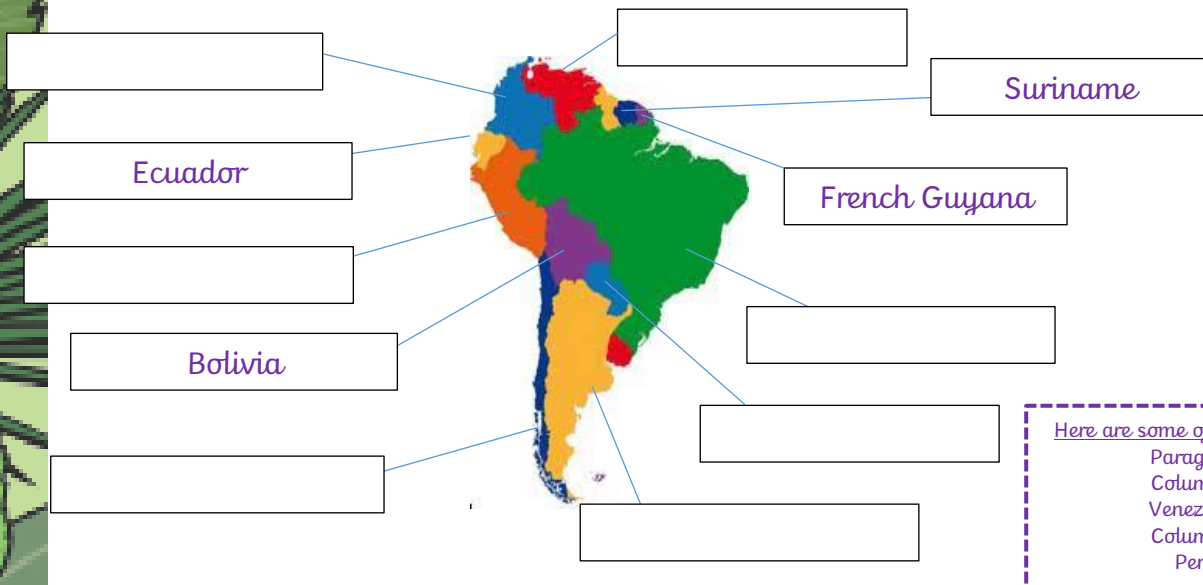


## End of topic quiz - Rainforest

1. In which **continent** is the **Amazon rainforest** located?

- ☐ Asia
- ☐ North America
- ☐ South America
- ☐ Europe

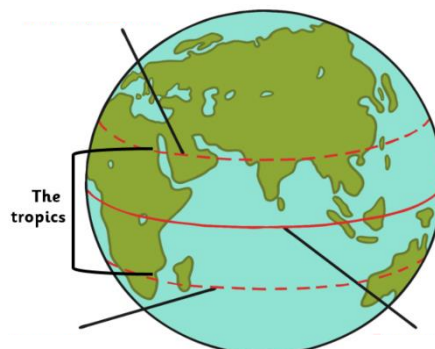
2. Label the countries that make up the **continent** of South America.



3. Complete the sentence below. You may use the words in the box below to help you:

**Tropical rainforests** are found on and near to the \_\_\_\_\_ and are mainly located in the **tropics**, which is the region of the earth between the \_\_\_\_\_ and the \_\_\_\_\_.

4. Now label the diagram below:



temperate  
Tropic of Cancer  
tropical places  
equator  
temperature  
Tropic of Capricorn  
latitude  
longitude  
climate

5. What imaginary lines run through the Amazon rainforests? **Tick one option**

- a) The Tropic of Cancer
- b) The Equator and the Tropic of Capricorn
- c) The Tropic of Capricorn
- d) The Equator and the Tropic of Capricorn



6. The map below shows the location of some of the rainforests around the world.

- a) Draw arrows from the **yellow boxes** to their correct location on the world map.
- b) Draw a line from the **green box** to show the location of the South American rainforests.




**CENTRAL AFRICA**  
(Democratic Republic of Congo/  
Gabon/ Equatorial Guinea)

**SOUTH EAST ASIA**  
(Indonesia/ Papua New Guinea/  
India/ Australia)

**SOUTH AMERICA**  
(Brazil/ Peru/ Mexico)

7. Number each label and fact to match the correct **layer of the rainforest**.



**canopy**

It is very cool  
and windy in  
this layer.

Plants in this  
layer are no  
taller than 3m.

Snakes,  
toucans and  
treefrogs live  
here.

**forest floor**

This layer is  
dark, hot and  
humid.

Trees in this  
layer can be as  
tall as 60m.

Many insects  
live here.

**understorey**

This layer gets  
the most rain  
and sunlight.

Trees in this  
layer form a  
roof over lower  
layers.

Monkeys,  
bats and  
butterflies  
live here.

**emergent**

This layer  
gets almost  
no sunlight.

Almost no  
plants grow  
in this layer.

Gorillas,  
leopards and  
tigers live  
here.

8. Look at the map below. What does this map tell you about the **climate** in Brazil compared to the UK? Explain your answer using the words below to help you.




---

---

---

---

---

---

equator	hemisphere
Tropic of Capricorn	Tropic of Cancer
tropical	climate
temperate	temperature

9. Name some of the products that we use in our lives that come from the rainforest.

Products that come from the rainforest		Products that <b><u>DO NOT</u></b> come from the rainforest	
Chocolate	Shampoo	Rubber	
Soap	Coffee	Vanilla	

10. How do these products impact the **indigenous tribes** in the rainforest?

<b>Positive</b>	<b>Negative</b>

